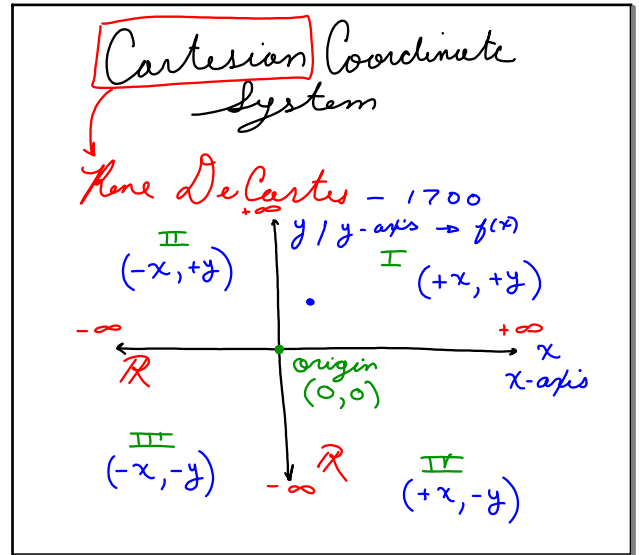


October 3, 2016  
 \* SSC #3 - Due Wednesday

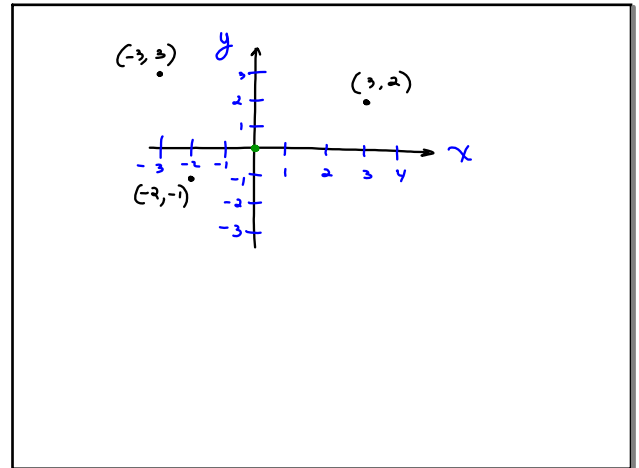
Oct 3-9:02 AM



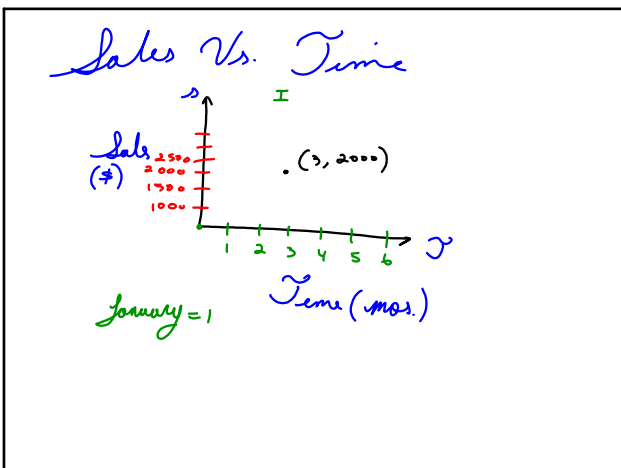
Oct 3-9:07 AM

ordered Pairs  
 $(x, y)$   
 (Horizontal Coord. , Vertical Coord.)  
 $(5, 3)$

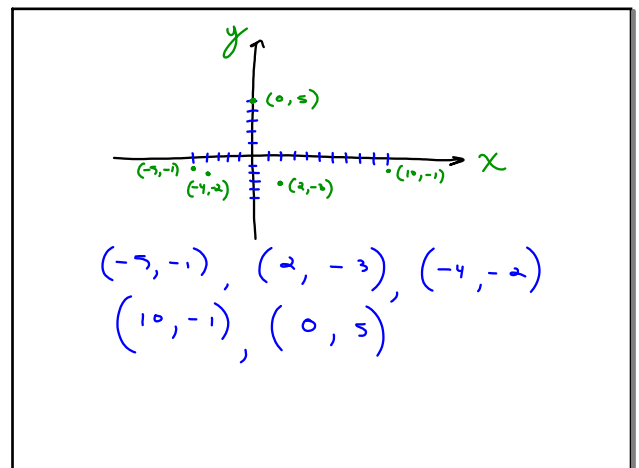
Oct 3-9:20 AM



Oct 3-9:31 AM



Oct 3-9:33 AM



Oct 3-9:38 AM

Graphing Equations  
in Two Variables

Lines:  $Ax + By = C$

Linear Equation  
in Standard Form

Oct 3-9:45 AM

$x + 2y = 4$

| x | y |
|---|---|
| 0 | 2 |

$0 + 2y = 4$   
 $2y = 4$   
 $y = 2$

Oct 3-9:47 AM